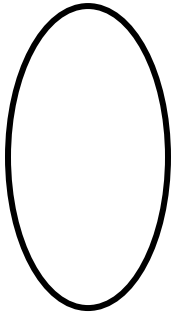


Name: _____


Date: _____

2D Shapes


Write how many sides, vertices and angles each shape has.



_____ Sides
_____ Vertices
_____ Angles




_____ Sides
_____ Vertices
_____ Angles



_____ Sides
_____ Vertices
_____ Angles



_____ Sides
_____ Vertices
_____ Angles



_____ Sides
_____ Vertices
_____ Angles



_____ Sides
_____ Vertices
_____ Angles