




Name _____ Date _____

Pet Bar Graph and Tally Marks Assessment



Pets			
	Dogs	Cats	Birds
10			
9			
8			
7			
6			
5			
4			
3			
2			
1			
			

Answer the questions about the pets:

1. Which pet has the most 😊? _____

2. Which pet has the least 😞? _____

3. How many votes altogether (+)? _____

4. How many birds ? _____ 

5. How many fish ? _____ 

6. How many dogs ? _____ 

7. How many dogs and fish (+)? _____  and fish (+) ? _____ 

8. How many cats and birds (+)? _____  and birds (+) ? _____ 

9. How many more dogs than cats (-)? _____  than cats (-) ? _____ 

10. How many more fish than birds (-)? _____  than birds (-) ? _____ 