







Name _____ Date _____

Zoo Animal Bar Graph and Tally Marks



Count the Tally Marks:

Elephants 		How Many? _____
Bears 		How Many? _____
Zebras 		How Many? _____

Answer the questions about the zoo animals:

1. Which animal is liked the most? _____
2. Which animal is liked the least? _____
3. How many votes altogether? _____
4. How many like elephants and zebras? _____
5. How many liked bears and zebras? _____
6. How many more like zebras than bears? _____
7. How many more liked elephants than bears? _____

Graph the number of tally marks you counted:

Favorite Zoo Animal		
10		
9		
8		
7		
6		
5		
4		
3		
2		
1		
Elephants 	Bears 	Zebras 